



# Zweeds loopspel

Rekenen groep 7/8





1. Schrijf 0,3 miljard voluit  
als getal



2.  $\frac{5}{8} + \frac{1}{4} = \underline{\quad}$





3.  $48 \text{ cm} = \underline{\quad} \text{ m}$



4. Vier appels wegen 480 gram.  
Hoeveel wegen drie appels?






$$5. 24 \times 63 = \underline{\quad}$$

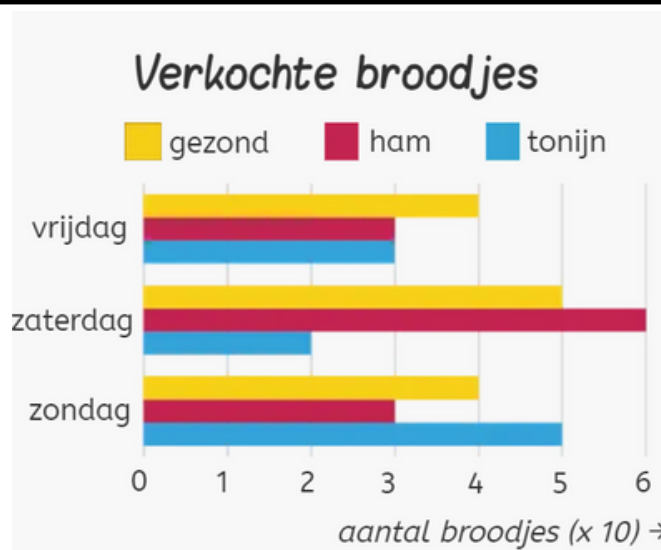




$$6. 5 \times \frac{1}{6} = \underline{\quad}$$






7. Een schilderij is 15 cm lang en 30cm breed. Wat is de oppervlakte van dit schilderij?




8. Hoeveel broodjes tonijn zijn er in totaal verkocht?





$$9. 4235:28 = \underline{\hspace{2cm}}$$




10. Aiden heeft €400 geleend. Hier betaalt hij 25% rente over. Hoeveel betaalt hij uiteindelijk terug?







11. 2,6 liter = \_\_\_\_\_ dm<sup>3</sup>



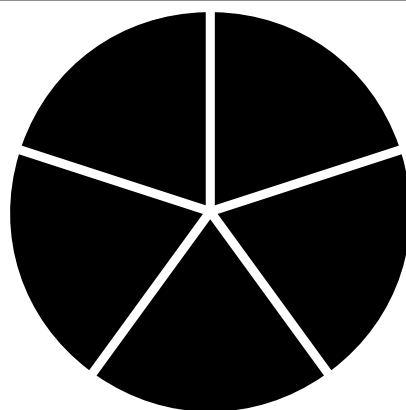
Dag	Afstand
Maandag	37 km
Dinsdag	41 km
Woensdag	21 km

12. Aimée gaat 3 dagen fietsen. Hoeveel km fietst zij gemiddeld per dag?






$$13. 2,431 + 17,34 = \underline{\hspace{2cm}}$$





14. Hoeveel % is elk vakje van deze cirkeldiagram?





8cm


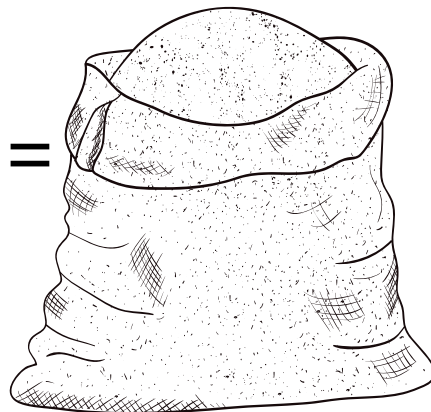


Schaal: 1:120

15. Hoe hoog is deze boom in het echt?



5kg zout =  
€18,00




16. Hoeveel kost dan 500 gram zout?



# Antwoordenblad


1	9
2	10
3	11
4	12
5	13
6	14
7	15
8	16



MeesterDanny

# Antwoordenblad

1	9
2	10
3	11
4	12
5	13
6	14
7	15
8	16



MeesterDanny

# Antwoorden

## Antwoordenblad

1 3000000000

2  $\frac{7}{8}e$

3 0,48 m

4 360 gram

5 1512

6  $\frac{5}{6}e$

7 450 cm<sup>2</sup>

8 100

9 151 rest 7

10 €500

11 2,6 dm<sup>3</sup>

12 33 km

13 19,771

14 25%

15 960 cm (9,6 m)

16 €1,80

